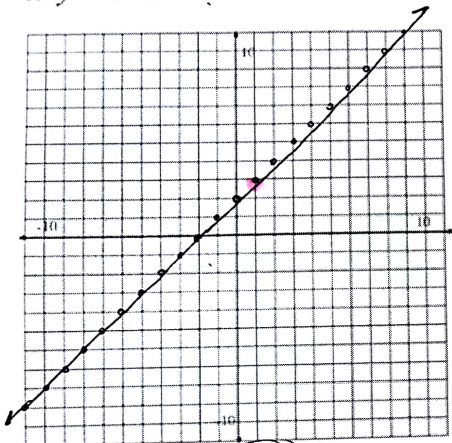
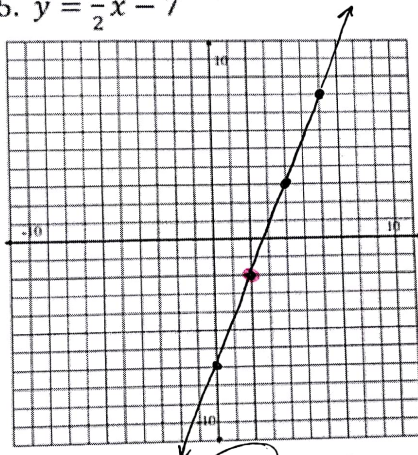


4.  $y = x + 2$



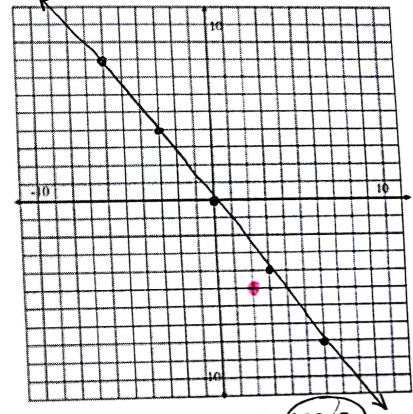
Point: (1, 3) Yes? No?

5.  $y = \frac{5}{2}x - 7$



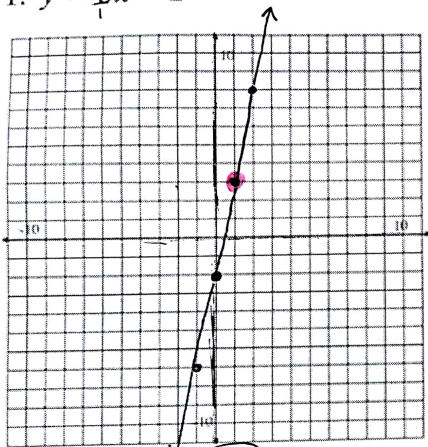
Point: (2, -2) Yes? / No?

6.  $y = -\frac{4}{3}x$



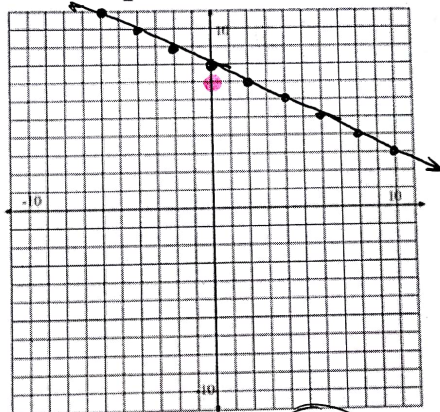
Point: (2, -5) Yes? No?

1.  $y = \frac{5}{1}x - 2$



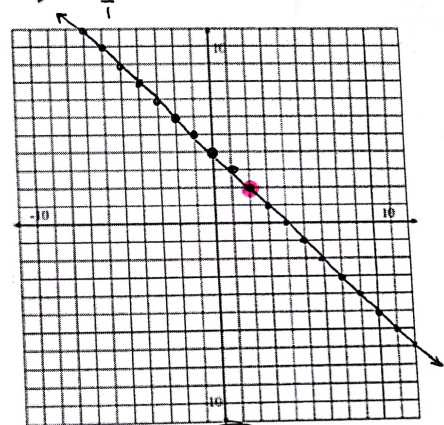
Point: (1, 3) Yes? / No?

2.  $y = -\frac{1}{2}x + 8$



Point: (0, 7) Yes? / No?

3.  $y = -\frac{1}{1}x + 4$



Point: (2, 2) Yes? / No?